

**M
A
T
H
E
M
A
T
I
C
S

4**

Modified In-School Off-School Approach Modules (MISOSA)
Distance Education for Elementary Schools
SELF-INSTRUCTIONAL MATERIALS



**EXPRESSING / WRITING
MONEY AS PESOS
AND CENTAVOS**



Department of Education
BUREAU OF ELEMENTARY EDUCATION
2nd Floor Bonifacio Building
DepEd Complex, Meralco Avenue
Pasig City

Revised 2010

by the Learning Resource Management and Development System (LRMDS),
DepEd - Division of Negros Occidental
under the Strengthening the Implementation of Basic Education
in Selected Provinces in the Visayas (STRIVE).

Section 9 of Presidential Decree No. 49 provides:

“No copyright shall subsist in any work of the Government of the Republic of the Philippines. However, prior approval of the government agency or office wherein the work is created shall be necessary for exploitation of such work for profit.”

This material was originally produced by the Bureau of Elementary Education of the Department of Education, Republic of the Philippines.

This edition has been revised with permission for online distribution through the Learning Resource Management Development System (LRMDS) Portal (<http://lrmds.deped.gov.ph/>) under Project STRIVE for BESRA, a project supported by AusAID.



EXPRESSING/WRITING MONEY AS PESOS AND CENTAVOS

Objective: Express/Write money as pesos and centavos.



Lately you have learned about the place value of digits in a decimal number. Before you go to your next lesson, review some of your past lessons

A. Give the place value of each underlined digit.

_____ 1) 215.05

_____ 4) 5.005

_____ 2) 9.13

_____ 5) 18.709

_____ 3) 14.165

B. Identify the digits of the number 168.324 according to the place value indicated below:

_____ 1. Tenths

_____ 2. Thousandths

_____ 3. Hundreds

_____ 4. Tens

_____ 5. Hundredths

Check your answer using the answer key. If your score is 9 or 10, you may now proceed to this module. If you get 8 correct answers or below, review adding numbers with five addends.





Study and Learn

Everytime Aling Berta goes to the market, she always buy the needs of her family at the “talipapa” or in the “Palengke ng Bayan”. She finds out that the food stuff in the “talipapa” are much lower than the mall or wet market in big department stores. She is conscious of the amount that she can save every market day. Usually she buys 5 kilos of NFA rice at ₱27.50 per kilo that amounts to ₱137.50; 3 kinds of leafy vegetables at ₱7.25 per "tali" amounting to ₱ 21.75; galunggong at ₱75.00 per kilo and buto-buto at ₱65.00 per kilo. She does not forget to buy salt at ₱5.00 per "supot", brown sugar at ₱26.00 a kilo. Although this outlook of Aling Berta does not make her family richer, her family budget could afford to save a little for emergency purpose. What kind of mother is Aling Berta?

What were the expenses of Aling Berta?

1. Rice – One hundred thirty-seven pesos and fifty centavos
2. Vegetables - Twenty-one pesos and seventy-five centavos - 3 “tali” at seven pesos and twenty-five centavos each
3. Fish - Seventy-five pesos
4. Buto-buto - Sixty-five pesos
5. Salt - Five pesos
6. Sugar - Twenty-six pesos

You may express or write money either in figures or in word form. The decimal point is read as "and". The pesos and centavos are separated by a decimal point.



Try These

A. Match the amount in words with that of the amount in figures.

- _____ 1. Thirty-six pesos
_____ 2. Two hundred pesos

- a. ₱9.15
b. ₱1 020.00





- _____ 3. Forty-five pesos
_____ 4. Nine pesos and fifteen centavos
_____ 5. One thousand and twenty pesos
- c. ₱36.00
d. ₱200.00
e. ₱45.00
f. ₱3.60

B. Michael deposited his savings from his allowance. Write the amount of his weekly deposits.

- _____ Week 1 = 2 ten-peso bills and 6 one-pesos coins
_____ Week 2 = 1 fifty-peso bill and five 5-centavo coins
_____ Week 3 = 3 ten-peso coins and 1 five-peso coin
_____ Week 4 = 5 five-peso coins and 2 twenty-five centavo coins
_____ How much money did Michael save?

How do you express/write money?



Use the peso sign (₱) when writing pesos and centavos. The decimal point separates the pesos and centavos which is read as "and".



A. Every lunch time, Ruther eats at the cafeteria since the food there is cheaper compared to the food sold in the store outside the school. Complete the following menu by writing the prices in figures of the prices given.

- Rice - four pesos and fifty centavos per serving
Menudo – twenty-five pesos and fifty centavos per serving
Soup - two pesos and twenty-five centavos per bowl
Leche Flan - six pesos and ninety-five centavos per slice

Rice (1) Menudo (2) Soup (3) Leche Flan (4)





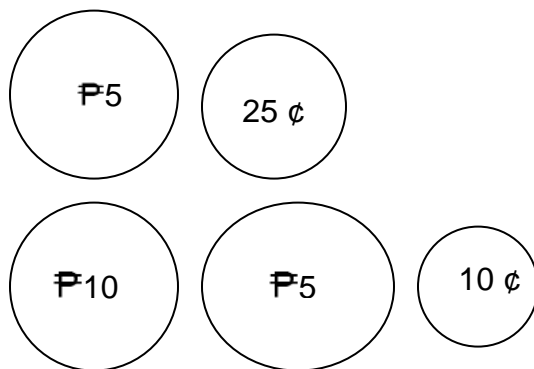
- (5) How much is the cheapest food?
 (6) If you want to save, which one will you not buy but take another.
How much is it?

B. Write each amount of money in decimals with the peso sign.

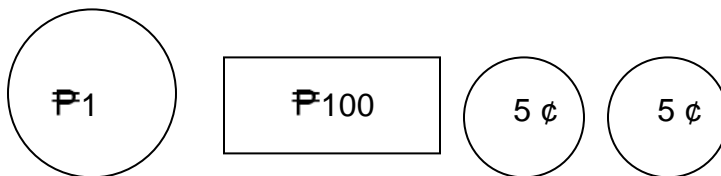
- _____ 7. 3 pesos and twenty centavos
_____ 8. 9 centavos
_____ 9. fifteen pesos and five centavos
_____ 10. nine hundred pesos and seventy-five centavos

C. Write the total amount of each number on your paper.

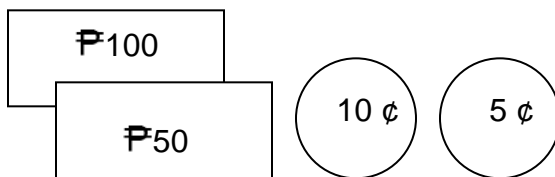
_____ 11.



_____ 12.

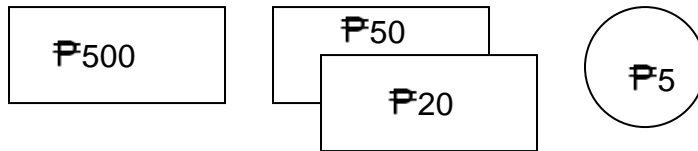


_____ 13.

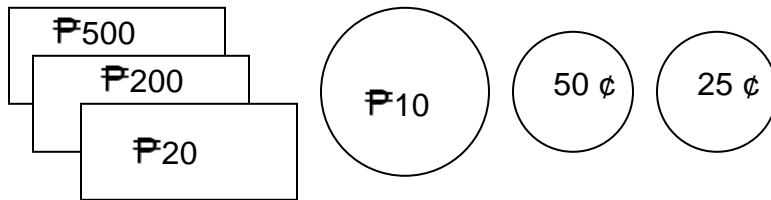




_____ 14.



_____ 15.



Check your answer with the answer key. If you get....

- 4-5 - *Excellent! You may now proceed to the next lesson.*
- 3-2 - *You need to review the processes you missed.*
- 0-1 - *You need to repeat the whole process. Ask your teacher or elder to help you.*

